


**unit**

**unit**  
An inch is a **unit** that can be used to measure the length of an object.

**length**

Fold here

**length**  
**Length** is the distance from one end to the other end of an object.



The length of the stamp is about 1 inch.

**inch**  
**(in.)**




This is 1 **inch**.



**width**


**width**

**Width** is the distance across an object.



**height**

**height**

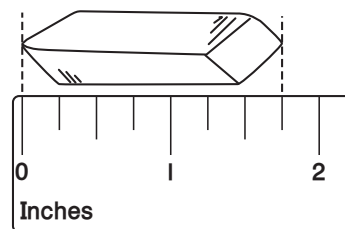


Fold here

**Height** is how tall something is.

**nearest inch**

**nearest inch**



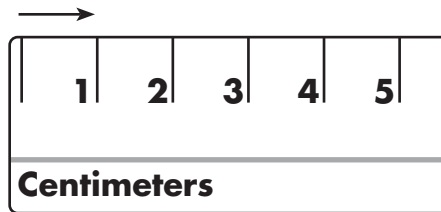
To the **nearest inch**, the eraser is about 2 inches long.



**centimeter (cm)**

**centimeter (cm)**

A metric unit used to measure length

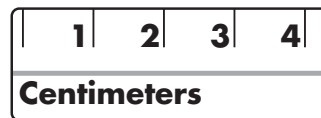


This is 1 **centimeter**.

**nearest centimeter**

Fold here

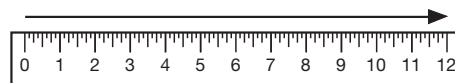
**nearest centimeter**



To the **nearest centimeter**, the paper clip is about 4 centimeters long.

**foot (ft) and feet (ft)**

**foot (ft) and feet (ft)**



There are 12 inches in one **foot**.



**yard (yd)**

**yard (yd)**

There are 3 feet in 1 **yard**.



A baseball bat is about  
1 **yard** long.

Fold here

**meter (m)**

**meter (m)**

A metric unit used to  
measure length



A golf club is about  
1 **meter** long.

